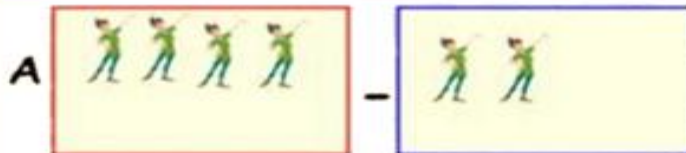


Subtraction - 2

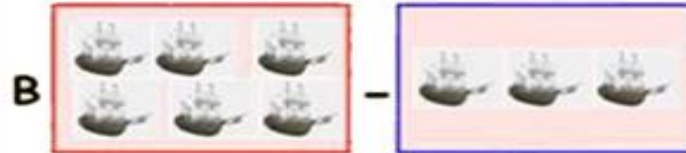
Lesson 2 Subtraction Name _____

- 1) Solve the subtraction problems listed below.
- 2) Place the value and the matching Letter.
- 3) Show your work in the space provided.
- 4) Scan the QR code after you complete the page to see if you got it correct answers.

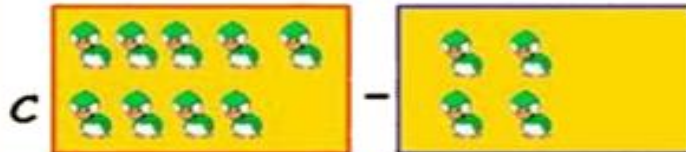
1) $12 - 5 =$ _____



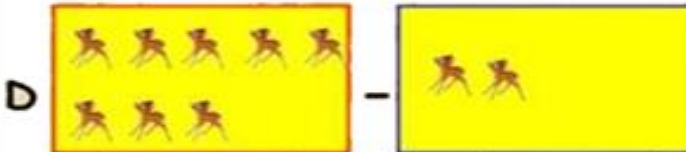
2) $5 - 1 =$ _____



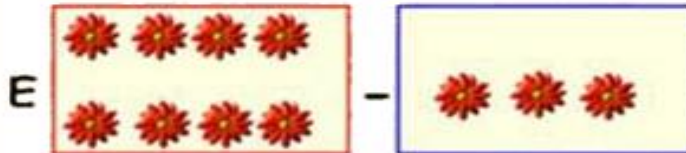
3) $8 - 3 =$ _____



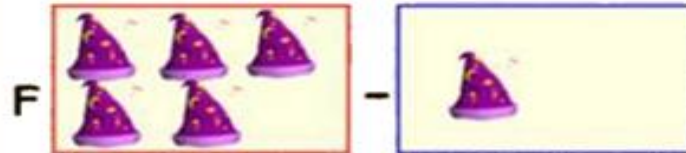
4) $9 - 4 =$ _____



5) $8 - 2 =$ _____



5) $6 - 3 =$ _____



7) $4 - 2 =$ _____

