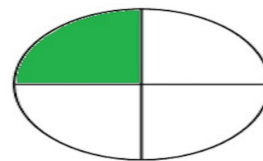


Fractions Review Lesson 2A

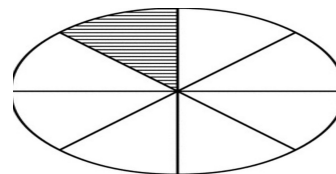
Date: _____

Name: _____

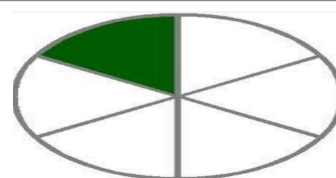
$1/5$




$4/6$




$2/4$



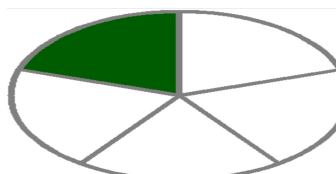
$1/2$



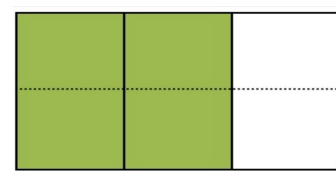
$1/6$



$1/8$



$1/4$



$1/3$

