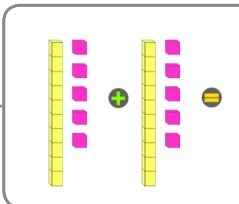
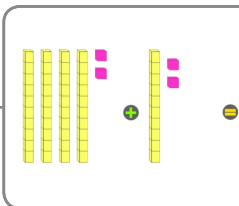


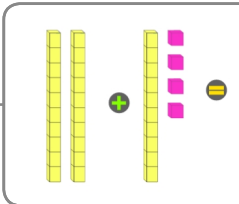
$100 + 100 = 200$

 What does this add up to?

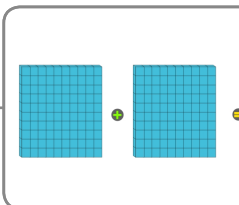
$15 + 15 = 30$

 What does this add up to?

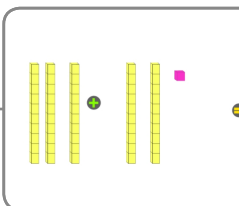
$30 + 21 = 51$

 What does this add up to?

$20 + 14 = 34$

 What does this add up to?

$42 + 12 = 54$

 What does this add up to?