

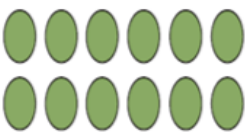
Lesson 1 Multiple Choice Arrays


Name \_\_\_\_\_





Directions: Circle the correct answers for questions 1-4. Fill in the answer for question 5. Scan the QR Code to check answers.


Circle the correct answers for questions 6 and 7. Fill in the answer for questions 8 -9-10. Scan the QR Code to check answers.


1  a.  $2 \times 6 = 12$  c.  $8 \times 3 = 24$   
b.  $7 \times 1 = 7$  d.  $3 \times 7 = 21$


2  a.  $3 \times 2 = 6$  c.  $4 \times 3 = 12$   
b.  $3 \times 3 = 9$  d.  $3 \times 4 = 12$


3  a.  $3 \times 3 = 9$  c.  $4 \times 3 = 12$   
b.  $3 \times 6 = 18$  d.  $5 \times 3 = 15$


4  a.  $3 \times 6 = 9$  c.  $4 \times 3 = 12$   
b.  $3 \times 6 = 18$  d.  $5 \times 3 = 15$


5  Darken in  
 $3 \times 7 = 21$

6  a.  $6 \times 6 = 36$  c.  $5 \times 6 = 30$   
b.  $4 \times 6 = 24$  d.  $6 \times 7 = 42$

7  a.  $5 \times 6 = 30$  c.  $5 \times 7 = 35$   
b.  $6 \times 3 = 18$  d.  $6 \times 8 = 48$

8  Darken in the correct number of circles to equal  $4 \times 7 = 28$

9  Darken in the correct number of circles to equal  $5 \times 5 = 25$

10  Darken in the correct number of circles to equal  $4 \times 4 = 16$