










LESSON STUDENT TOP-SECRET CODE

NAME _____

Directions: Solve the math problems to crack the top secret code. Place the letters above the number that you completed. Scan the QR Code to check your answers.

—	$\frac{1}{1}$		$\frac{2}{2}$	=	
—	$\frac{1}{1}$		$\frac{2}{2}$	=	
—	$\frac{1}{1}$		$\frac{2}{2}$	=	
—	$\frac{1}{1}$		$\frac{2}{2}$	=	
—	$\frac{1}{1}$		$\frac{2}{2}$	=	
—	$\frac{1}{1}$		$\frac{2}{2}$	=	
—	$\frac{1}{1}$		$\frac{2}{2}$	=	
—	$\frac{1}{1}$		$\frac{2}{2}$	=	
—	$\frac{1}{1}$		$\frac{2}{2}$	=	