






**PRE-SCHOOL MATH LESSON LESSION 3**

NAME \_\_\_\_\_

*Place a Circle around the number showing the correct number of balloons on the left.*

1		<table border="1"><tbody><tr><td>1</td><td>4</td><td>3</td><td>2</td><td>5</td></tr></tbody></table>	1	4	3	2	5
1	4	3	2	5			
2		<table border="1"><tbody><tr><td>1</td><td>4</td><td>3</td><td>2</td><td>5</td></tr></tbody></table>	1	4	3	2	5
1	4	3	2	5			
3		<table border="1"><tbody><tr><td>1</td><td>4</td><td>3</td><td>2</td><td>5</td></tr></tbody></table>	1	4	3	2	5
1	4	3	2	5			
4		<table border="1"><tbody><tr><td>1</td><td>4</td><td>3</td><td>2</td><td>5</td></tr></tbody></table>	1	4	3	2	5
1	4	3	2	5			
5		<table border="1"><tbody><tr><td>1</td><td>4</td><td>3</td><td>2</td><td>5</td></tr></tbody></table>	1	4	3	2	5
1	4	3	2	5			